

1. Functions:			
<p>Given: $f(x) = 3x + 5$ and $g(x) = x^2 + 3$ and $h(x) = x - 5$</p>	<p>EX: Find: $(f + g)(3)$</p> $f + g = 3x + 5 + (x^2 + 3)$ $= x^2 + 3x + 8$ $f(3) + g(3) = 9 + 9 + 8 = \boxed{26}$	<p>1. Given: $f(x) = 3x + 5$ and $g(x) = x^2 + 3$ and $h(x) = x - 5$</p> <p>a) Find: $(g + h)(4)$</p> $g + h = (x^2 + 3) + (x - 5)$ $= x^2 + x - 2$ $(g + h)(4) = 16 + 4 - 2 = \boxed{18}$ <p>or</p> $g(4) + h(4) = 19 + -1 = \boxed{18}$	<p>2. Given: $f(x) = 3x + 5$ and $g(x) = x^2 + 3$ and $h(x) = x - 5$</p> <p>b) Find: $(f - h)(-2)$</p> $f - h = (3x + 5) - (x - 5)$ $= 2x + 10$ $(f - h)(-2) = -4 + 10 = \boxed{6}$ <p>or</p> $f(-2) - h(-2) = -1 - (-7) = \boxed{6}$
<p>EX: Find: $(f \cdot g)(-2)$</p> $f(-2) \cdot g(-2) = [3(-2) + 5]$ $= -1 \cdot 7$ $= \boxed{-7}$	<p>EX: Find: $(f \cdot g)(-2)$</p> $f(-2) \cdot g(-2) = [3(-2) + 5]$ $= -1 \cdot 7$ $= \boxed{-7}$	<p>a) Find: $(g \cdot h)(2)$</p> $g(2) \cdot h(2) = (2^2 + 3) \cdot (2 - 5)$ $= 7 \cdot -3$ $= \boxed{-21}$	<p>b) Find: $(f \cdot h)(-3)$</p> $f(-3) \cdot h(-3) = [3(-3) + 5] \cdot$ $= -4 \cdot -8$ $= \boxed{32}$
<p>EX: Find: $f(1) - g(-2) + h(3)$</p> $= (3(1) + 5) - ((-2)^2 + 3) + (3 - 5)$ $= 8 - 7 + (-2)$ $= \boxed{-1}$	<p>EX: Find: $f(1) - g(-2) + h(3)$</p> $= (3(1) + 5) - ((-2)^2 + 3) + (3 - 5)$ $= 8 - 7 + (-2)$ $= \boxed{-1}$	<p>a) Find: $f(2) + g(-2) + h(4)$</p> $(3(2) + 5) + ((-2)^2 + 3) + (4 - 5)$ $= 11 + 7 - 1$ $= \boxed{17}$	<p>b) Find: $f(-1) - g(2) + h(-2)$</p> $(3(-1) + 5) - (2^2 + 3) + (-2 - 5)$ $= 2 - 7 + -7$ $= \boxed{-12}$

1. Functions Continued)

EX: Find $f(g(2)) = f(g(2))$
 work from inside out
 $g(2) = 2^2 + 3 = 7$
 $f(7) = 3(7) + 5 = 26$
 $(f \circ g)(2) = \boxed{26}$

a) Find $g(h(-3)) = g(h(-3))$
 $h(-3) = -3 - 5 = -8$
 $g(-8) = (-8)^2 + 3 = 67$
 $(g \circ h)(-3) = \boxed{67}$

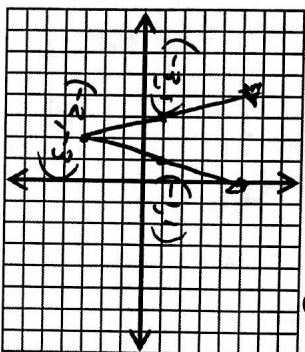
b) Find $g(f(2)) = g(f(2))$
 $f(2) = 3(2) + 5 = 11$
 $g(11) = 11^2 + 3 = 124$
 $(g \circ f)(2) = \boxed{124}$

2. Graphing:
 Quadratics, Absolute
 Value, etc.

Graph. Label Vertex and 2 other points.

EX: $y = 4|x + 2| - 3$
 $V(-2, -3)$ st by 4

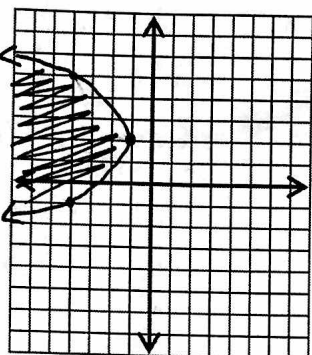
X	Y
-3	1
-2	-3
-1	1



Graph. Label Vertex and 2 other points.

EX: $y \leq -\frac{1}{3}(x+2)^2 - 1$ reflected
 comp by $\sqrt{3}$, $V(-2, -1)$

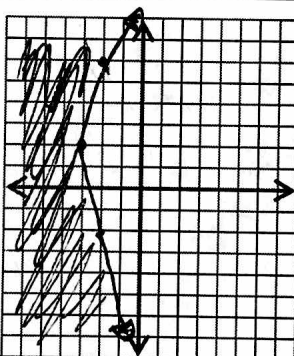
X	Y
-5	-4
-2	-1 (V)
1	-4



Graph. Label Vertex and 2 other points.

a) $y \leq \frac{1}{4}|x + 2| - 3$
 $V(-2, -3)$ comp by $\sqrt{4}$

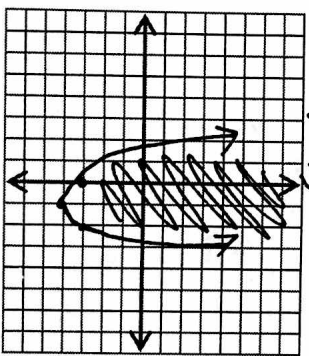
X	Y
-6	-2
-2	-3 (V)
2	-2



Graph. Label Vertex and 2 other points.

a) $y > (x - 1)^2 - 4$
 $V(1, -4)$

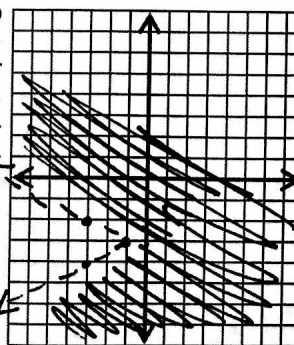
X	Y
0	-3
1	-4 (V)
2	-3



Graph. Label Vertex and 2 other points.

b) $y > -2|x - 3| - 1$
 $V(3, -1)$ st by 2, reflected

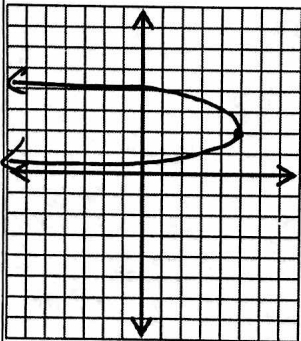
X	Y
2	-3
3	-1 (V)
4	-3



Graph. Label Vertex and 2 other points.

b) $y = -3(x + 2)^2 + 5$
 $V(-2, 5)$
 st by 3, reflected

X	Y
-2	5 (V)
-5	2
1	2



3. Simplifying imaginary numbers.

Simplify:

EX: $(-2i^{12})(3i^8)(4i^9)(-2i^{33})$

$$= 4i^8 i^{6^2}$$

$$= 4i^8 i^2$$

$$= 4i^8 (-1)$$

$$= \boxed{-4i^8}$$

Simplify:

a) $(3i^{16})(3i^{15})(-i^7)(4i^{20})$

$$= -36i^{5^8}$$

$$= -36i^2$$

$$= -36(-1)$$

$$= \boxed{36}$$

Simplify:

b) $(-2i^6)(-5i^{15})(-2i^{19})(4i^{23})$

$$= -80i^{6^3}$$

$$= -80i^3$$

$$= -80(-i)$$

$$= \boxed{80i}$$

4. Finding

zeros/roots/solutions of a function.

EX: Find the zeros of the function.

$$x^2 - 2x - 15 = y$$

$$x^2 - 2x - 15 = 0$$

$$(x-5)(x+3) = 0$$

$$x = \boxed{5, -3}$$

a) Find the zeros of the function.

$$6x^2 + 14x + 8 = y$$

$$6x^2 + 14x + 8 = 0$$

$$2(3x^2 + 7x + 4) = 0$$

$$2(3x+4)(x+1) = 0$$

$$x = \boxed{-4/3, -1}$$

b) Find the zeros of the function.

$$x^3 + 4x^2 - 21x = y$$

$$x^3 + 4x^2 - 21x = 0$$

$$x(x^2 + 4x - 21) = 0$$

$$x(x+7)(x-3) = 0$$

$$x = \boxed{0, -7, 3}$$

$$\frac{-b \pm \sqrt{b^2 - 4ac}}{2a}$$

EX: Find the roots (real or complex).

$$3x^2 - x + 5 = 0$$

$$= \frac{1 \pm \sqrt{1 - 4(3)(5)}}{2(3)}$$

$$= \frac{1 \pm \sqrt{-59}}{6}$$

$$= \boxed{\frac{1 \pm i\sqrt{59}}{6}}$$

EX: Find the roots (real or complex).

$$2x^2 + 4x + 1 = 0$$

$$= \frac{-4 \pm \sqrt{16 - 4(2)(1)}}{2(2)}$$

$$= \frac{-4 \pm \sqrt{8}}{4} = \frac{-4 \pm 2\sqrt{2}}{4}$$

$$= \boxed{\frac{-2 \pm \sqrt{2}}{2}}$$

EX: Find the roots (real or complex).

$$16x^2 - 36x + 1 = 0$$

$$= \frac{36 \pm \sqrt{1296 - 4(16)(1)}}{32}$$

$$= \frac{36 \pm \sqrt{1232}}{32}$$

$$= \frac{36 \pm 4\sqrt{77}}{32} = \boxed{\frac{9 \pm \sqrt{77}}{8}}$$

5. Factoring
Polynomials

EX: Factor: $48h^5 - 3h$

$$= 3h(16h^4 - 1)$$

$$= 3h(4h^2 - 1)(4h^2 + 1)$$

$$= 3h(2h - 1)(2h + 1)(4h^2 + 1)$$

EX: Factor: $9m^4 - 4$

$$= (3m^2 - 2)(3m^2 + 2)$$

EX: Factor: $8 - 27x^3$

$$(2 - 3x)(4 + 6x + 9x^2)$$

EX: Factor: $1 + 64n^3$

$$(1 + 4n)(1 - 4n + 16n^2)$$

a) Factor: $81x - 3x^4$

$$= 3x(27 - x^3)$$

$$= 3x(3 - x)(9 + 3x + x^2)$$

a) Factor: $81 - 4x^2$

$$= (9 - 2x)(9 + 2x)$$

a) Factor: $64m^3 - 125$

$$(4m - 5)(16m^2 + 20m + 25)$$

a) Factor: $8x^3 + 125$

$$(2x + 5)(4x^2 - 10x + 25)$$

b) Factor: $x^4 - 16x^2$

$$= x^2(x^2 - 16)$$

$$= x^2(x - 4)(x + 4)$$

b) $16x^4 - 9x^2$

$$= x^2(16x^2 - 9)$$

$$= x^2(4x - 3)(4x + 3)$$

b) Factor: $1 - 8y^3$

$$(1 - 3y)(1 + 3y + 9y^2)$$

b) Factor: $64 + m^3$

$$(4 + m)(16 - 4m + m^2)$$

6. Operations on Polynomials

Long Division:

$$\begin{array}{r} 2y+5 \\ 6y+3 \overline{) 12y^2+36y+15} \\ \underline{12y^2+6y} \\ 30y+15 \\ \underline{30y+15} \\ 0 \end{array}$$

$$\boxed{2y+5}$$

$$\begin{array}{r} x^2+x-1 \\ 4x+1 \overline{) 4x^3+5x^2-3x+1} \\ \underline{4x^3+x^2} \\ 4x^2-3x \\ \underline{4x^2+x} \\ -4x+1 \\ \underline{-4x-1} \\ 2 \end{array}$$

$$\boxed{x^2+x-1+\frac{2}{4x+1}}$$

$$\begin{array}{r} x^3-x \\ 2x+3 \overline{) 2x^4+3x^3-2x^2-3x-6} \\ \underline{2x^4+3x^3} \\ -2x^2-3x \\ \underline{-2x^2-3x} \\ -6 \end{array}$$

$$\boxed{x^3-x+\frac{-6}{2x+3}}$$

Synthetic Division:

EX: $(x^4 + x^2 - 3x + 5) \div (x + 2)$

$$\begin{array}{r} -2 \overline{) 1 \ 0 \ 1 \ -3 \ 5} \\ \underline{-2 \ 4 \ -10 \ 26} \\ 1 \ -2 \ 5 \ -13 \ 31 \end{array}$$

$$\boxed{x^3 - 2x^2 + 5x - 13 + \frac{31}{x+2}}$$

a) $(m^3 + 3m^2 - 7m - 21) \div (m + 3)$

$$\begin{array}{r} -3 \overline{) 1 \ 3 \ -7 \ -21} \\ \underline{-3 \ 0 \ 21} \\ 1 \ 0 \ -7 \ 0 \end{array}$$

$$\boxed{m^2 - 7}$$

b) $(3a^4 - 6a^3 - 2a^2 + a - 6) \div (a + 1)$

$$\begin{array}{r} -1 \overline{) 3 \ -6 \ -2 \ 1 \ -6} \\ \underline{-3 \ 9 \ 7 \ 6} \\ 3 \ -9 \ 7 \ -6 \ 0 \end{array}$$

$$\boxed{3a^3 - 9a^2 + 7a - 6}$$

7. Simplifying Complex Numbers

EX: $(5 - 3i)(2 + 4i)$
 $10 + 20i - 6i + 12$

$22 + 14i$

a) $(6 + 6i)(2 - 3i)$

$12 - 18i + 12i + 18$

$30 - 6i$

b) $(4 + 2i)(3 - 3i)$

$12 - 12i + 6i + 6$

$18 - 6i$

EX: $\frac{1+2i}{3-4i}$

$\frac{3+4i+6i-8}{9+16}$

$\frac{-5+10i}{25} = \frac{-1+2i}{5}$

EX: i^{49}

i

a) $\frac{2-5i}{4+i} = \frac{(4-i)(2-5i)}{(4-i)(4+i)} = \frac{8-22i-5}{17}$

$\frac{3-22i}{17}$

a) $i^{23} = i^3 = -i$

b) $\frac{3+4i}{-6i} = \frac{(6i)(3+4i)}{36}$

$\frac{3i-4}{6}$

b) $i^{64} = 1$

8. Simplifying Expressions with Integer Exponents

EX: $\left(\frac{4x^3y^{-4}z}{16x^5y^{-2}z^3}\right)^2$

$= \left(\frac{1}{4x^2y^2z^2}\right)^2$

$= \frac{1}{16x^4y^4z^4}$

a) $\left(\frac{25x^6y^2z^{-6}}{125x^2y^{-2}z^4}\right)^{-3}$

$= \left(\frac{1y^4y^4}{5z^{10}}\right)^{-3}$

$= \left(\frac{5z^{10}}{x^4y^4}\right)^3$

$= \frac{125z^{30}}{x^{12}y^{12}}$

b) $\left(\frac{3p^{-2}q^6r^5}{9q^{-3}r^3}\right)^4$

$= \left(\frac{1q^9r^2}{3p^2}\right)^4$

$= \frac{q^{36}r^8}{81p^8}$

9. Simplifying Radical Expressions

EX: $\sqrt[3]{64x^4y^{12}z^0}$
 $\boxed{4xy^4\sqrt[3]{x}}$

a) $\sqrt{8x^5y^{10}z^2}$

$\boxed{2x^2y^5\sqrt{2x}}$

b) $\sqrt[4]{16a^6b^9c^8}$

$\boxed{2|a|b^2c^2\sqrt[4]{a^2b}}$

10. Pascal's Triangle/Binomial Theorem

EX: Find the 3rd term of $(2x + 3)^4$

$6(2x)^2(3)^2$
 $= 6(4x^2)(9)$
 $= \boxed{216x^2}$

a) Find the 3rd term of $(4 - 2x)^5$

$= 10(4)^2(-2x)^3$
 $= 10(16)(-8x^3)$
 $= \boxed{-1280x^3}$

b) Find the 4th term of $(3x - 4)^6$

$= 20(3x)^3(-4)^3$
 $= 20(27x^3)(-64)$
 $= \boxed{-34,560x^3}$